

Name _____


Date _____




COUNT AND MATCH

Draw a line from each number to the correct amount of objects in each box.

1




2



3



4



5

