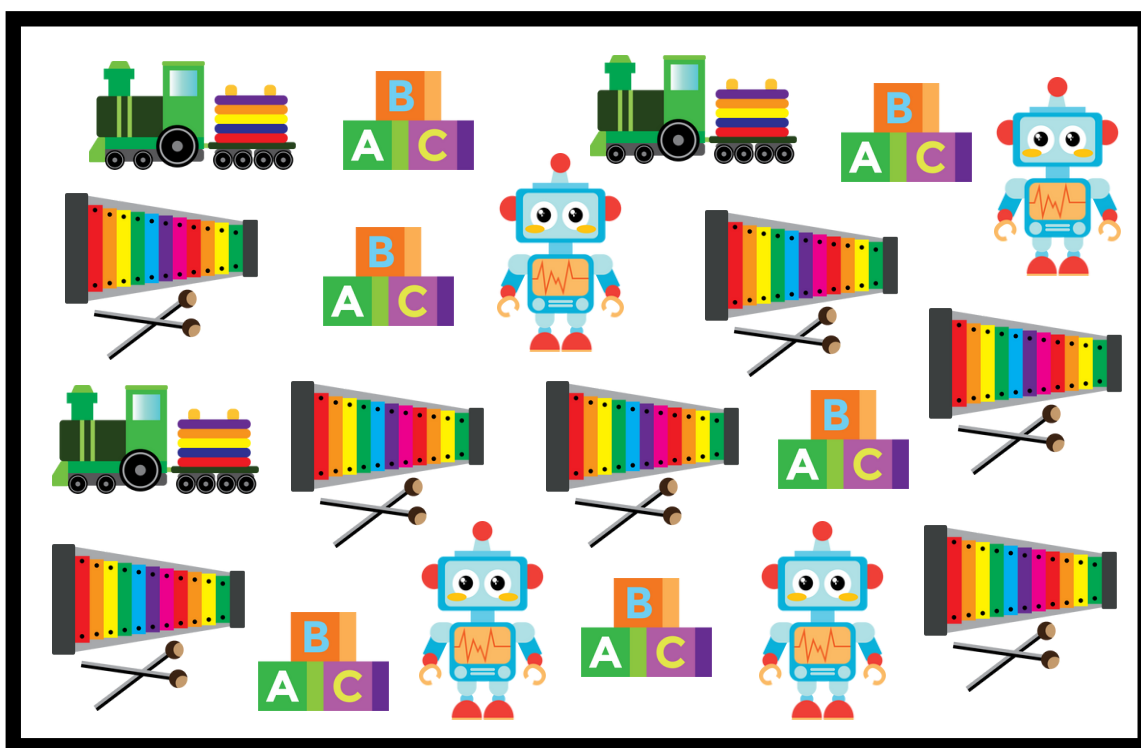


Name \_\_\_\_\_

Date \_\_\_\_\_

# GRAPHING


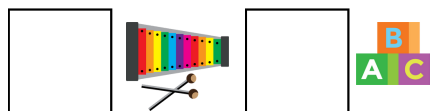
Find and graph the items listed. Then answer the questions below.



|    |  |  |  |  |
|----|--|--|--|--|
| 10 |  |  |  |  |
| 9  |  |  |  |  |
| 8  |  |  |  |  |
| 7  |  |  |  |  |
| 6  |  |  |  |  |
| 5  |  |  |  |  |
| 4  |  |  |  |  |
| 3  |  |  |  |  |
| 2  |  |  |  |  |
| 1  |  |  |  |  |



How many of each?



Which item did you find the most of?

Which item did you find the least of?