

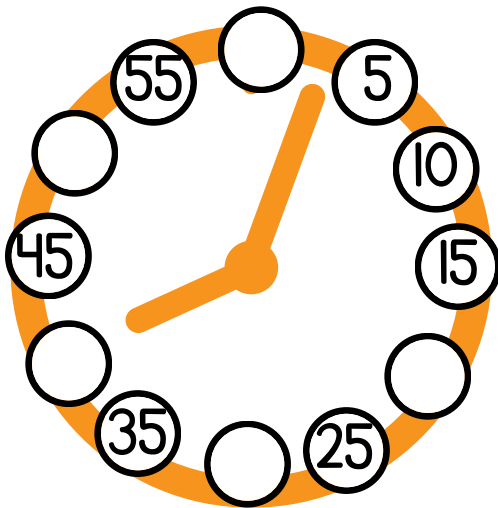


Name \_\_\_\_\_

Date \_\_\_\_\_



Count by  
Tens!

Write the missing numbers.



|     |     |    |     |     |
|-----|-----|----|-----|-----|
| 10  | 20  |    |     | 50  |
|     | 70  | 80 |     |     |
| 110 | 120 |    | 140 |     |
| 160 |     |    | 190 | 200 |

Skip count by 10s. How much money do you have?

