

Name \_\_\_\_\_


Date \_\_\_\_\_



# COUNT AND MATCH THE SPORTS BALLS

Draw a line from each number to the correct amount of balls in each box.

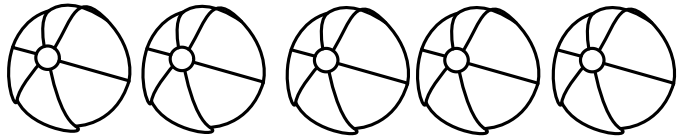
1




2



3



4



5

